



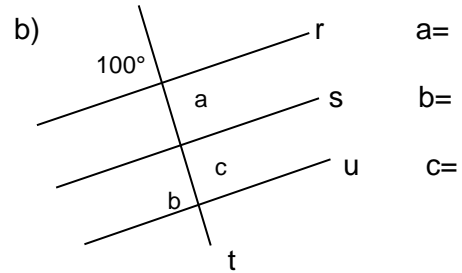
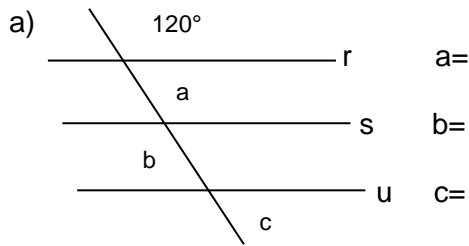
# Colégio Universitário de Avaré

NOME	Nº	SÉRIE 8º	BIMESTRE 1º	Ensino Fund. II
DISCIPLINA MATEMÁTICA		PROFESSORA ENIER		DATA / 03 /20

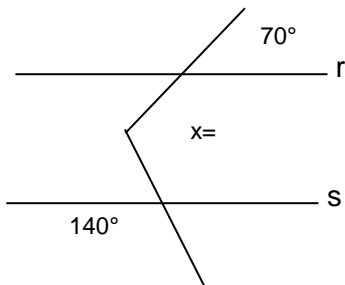
## ÂNGULOS: EXERCÍCIOS DE FIXAÇÃO

### Retas paralelas cortadas por transversal: ângulos formados

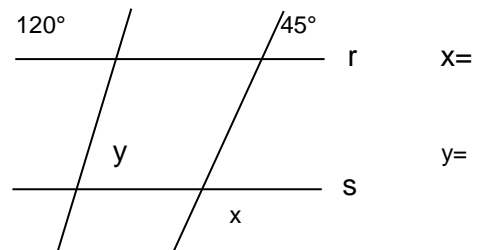
1) Sendo  $r//s//u$ , calcule as medidas dos ângulos assinalados:



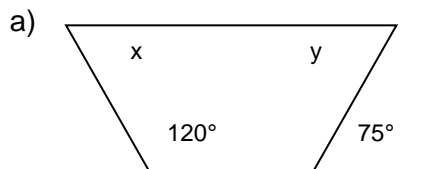
2) Calcule  $x$ , sendo  $r//s$



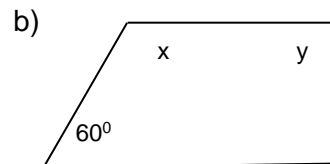
3) Sendo  $r//s$ , determine  $x$  e  $y$ .



4) Determine as medidas dos ângulos dos trapézios:



$x=$   
 $y=$



$x=$   
 $y=$

essas atividades são apenas para matarmos a

